

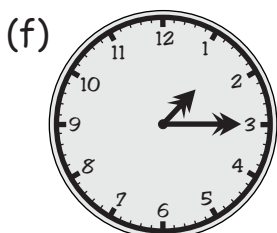
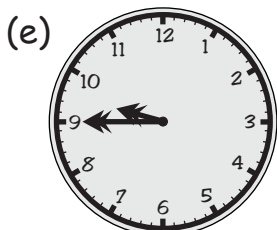
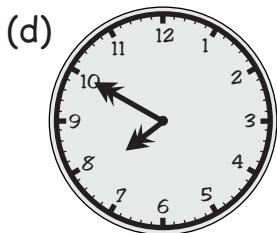
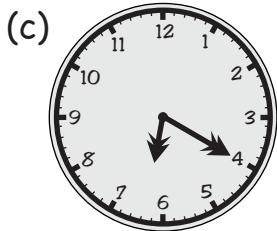
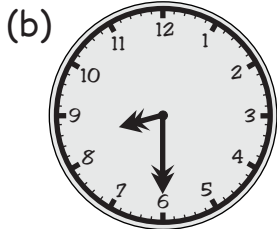
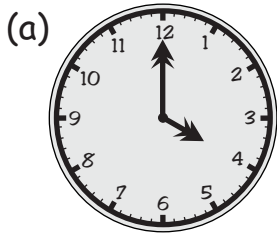
# TIME

MARK

# 20

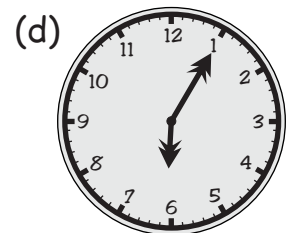
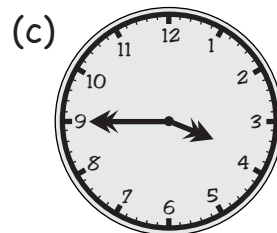

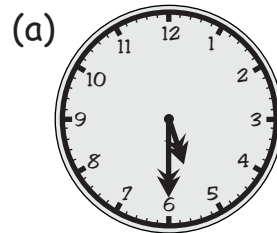
1. Use words to write the time shown on each clock below.

**Examples**  
Seven o'clock  
Half past two  
Ten past five  
Quarter to nine

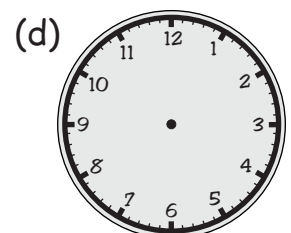
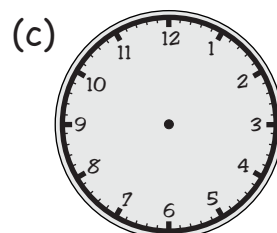
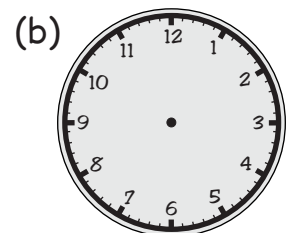
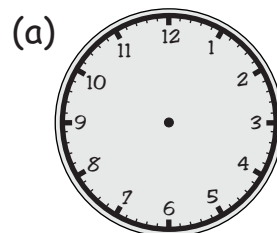


2. Write the times below in **digital** form.

**Examples**  
3:45  
11:20



3. Draw the hands on the clocks below for the times shown.



4. Fill in the numbers in the following.

- (a) 1 year = \_\_\_\_\_ months
- (b) 1 week = \_\_\_\_\_ days
- (c) 1 day = \_\_\_\_\_ hours
- (d) 1 hour = \_\_\_\_\_ minutes
- (e) 1 minute = \_\_\_\_\_ seconds
- (f) April = \_\_\_\_\_ days
- (g) December = \_\_\_\_\_ days

5. What are the following dates?

(a) Australia Day

\_\_\_\_\_

(b) Christmas Day

\_\_\_\_\_

(c) April Fool's Day

\_\_\_\_\_

6. (a) How many days are in  June?

Marcus is 10 days younger than Ki.

(b) Is Marcus's birthday before or after Ki's birthday?

(c) Ki's birthday is the 25<sup>th</sup> of June. What is the date of  Marcus's birthday?

7. What year were the Olympic Games held in Sydney?

8. Tayla is making a banana cake. The cake needs to be in the oven for 40 minutes. Tayla put it in the oven at 5:40.

At what time should she take it out of the oven?

9. A train timetable between Melbourne (Southern Cross) and Bacchus Marsh is shown below.

Station	Time
Southern Cross	8:30
Footscray	8:37
Sunshine	8:43
Ardeer	8:46
Deer Park	8:50
Rockbank	9:07
Melton	9:14
Bacchus Marsh	9:27

(a) What time does this train leave from the following stations?

(i) Southern Cross

(ii) Sunshine

(iii) Rockbank

(b) What time does the train arrive at Bacchus Marsh?

(c) How many minutes does it take the train to travel between the following stations?

(i) Spencer St and Footscray

(ii) Footscray and Sunshine

(iii) Ardeer and Rockbank

(iv) Southern Cross and Bacchus Marsh