

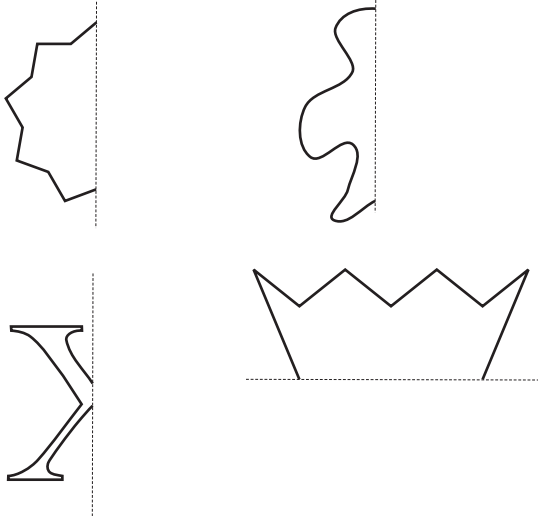
Master Maths 8 Worksheet 37

Symmetry and Reflections

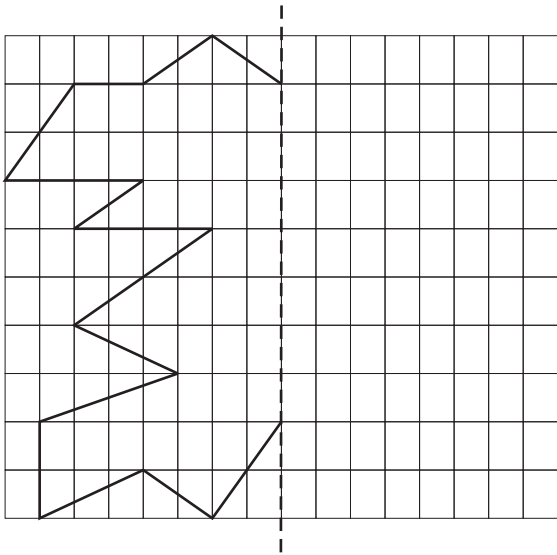
37

Name: _____

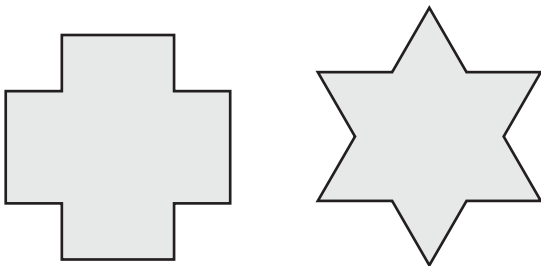
1. Complete these symmetrical shapes by drawing the other half.



2. Complete this symmetrical shape by drawing its other half.



3. Draw *all* the axes of symmetry on the following shapes.



4. (a) Jayme woke up one morning and saw the reflection of her clock in the mirror. The reflection is shown here.

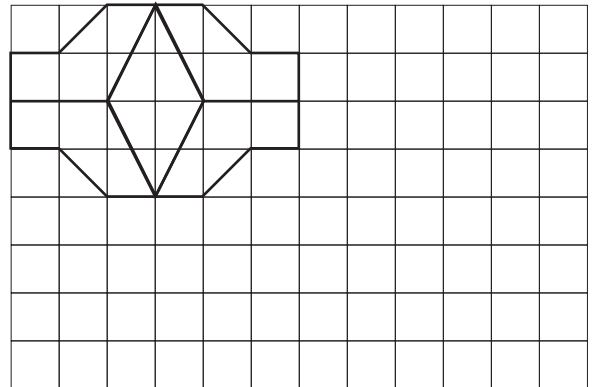


What was the actual time?

- (b) The next day Jayme wanted to get up early to go for a jog. She again looked at the time in the mirror and got up one hour earlier than she wanted to.

What time did she want to get up?

5. Complete this pattern using reflections of the shape. Creatively colour it in.



6. Colour in the clock below that is a reflection of this clock.

