

# SHAPES 3

MARK

# 15

1. The capital letter A has a vertical line of symmetry.



List all the other letters that have a vertical line of symmetry.

---

---

2. The capital letter B has a horizontal line of symmetry.



List all the other letters that have a horizontal line of symmetry.

---

3. List all the letters that have vertical **and** horizontal lines of symmetry.

---

4. The words below have a line of symmetry. Complete the words by drawing the other half of each word.

BOV

MI

CHICK

N  
C  
T  
H

5. Write down three other words that have a line of symmetry.

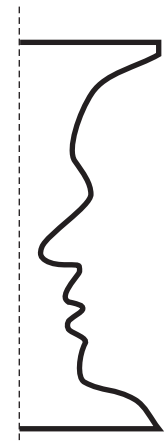
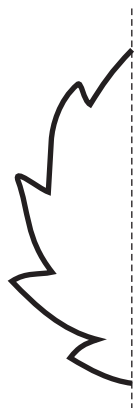
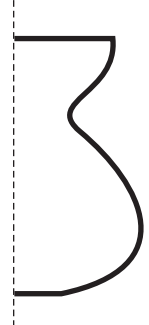

---

---

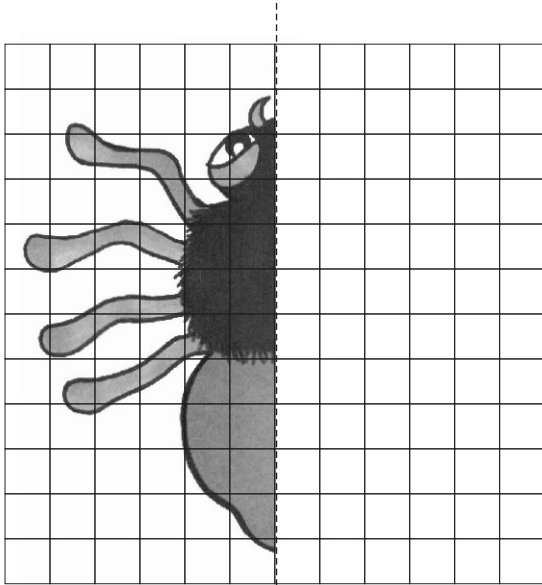
---

6. Complete the symmetrical shapes below by drawing the other half of each shape.



The lines of symmetry are shown.



7. Complete the spider shown here by drawing the other half around the line of symmetry.



8. Draw an enlarged version of the dog shown here on the grid below.



9. Complete the tessellations shown below and colour in.

