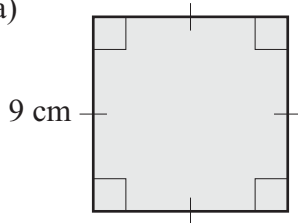


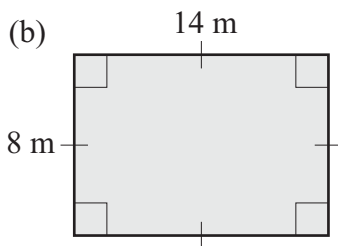
Name: _____

1. Find the area of the following shapes.

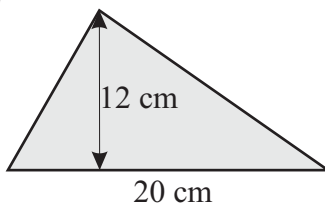
(a)



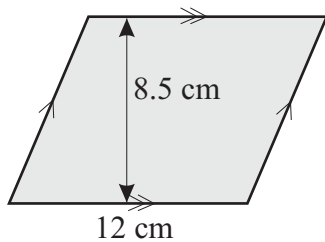
(b)



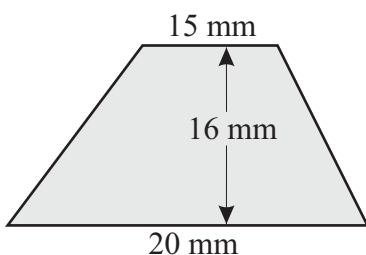
(c)



(d)



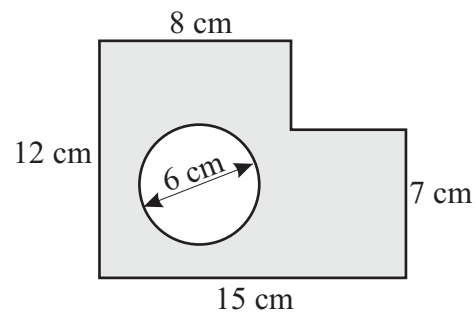
(e)



2. (a) Find the area of a circle with a diameter of 18 cm.
Give answer correct to one decimal place.

(b) Find the area of a circle with a radius of 12.6 cm.
Give answer correct to one decimal place.

3. Find the shaded area of this shape.
Give answer correct to one decimal place.



4. Blake has a rectangular yard that is 15 metres long and 12 metres wide. In the yard there is a circular fish pond with diameter 6 metres and a shed that is 6 metres long and 4 metres wide. Blake wants to spread gravel over the rest of the yard. What is the area to be gravelled?
Give answer correct to one decimal place.