

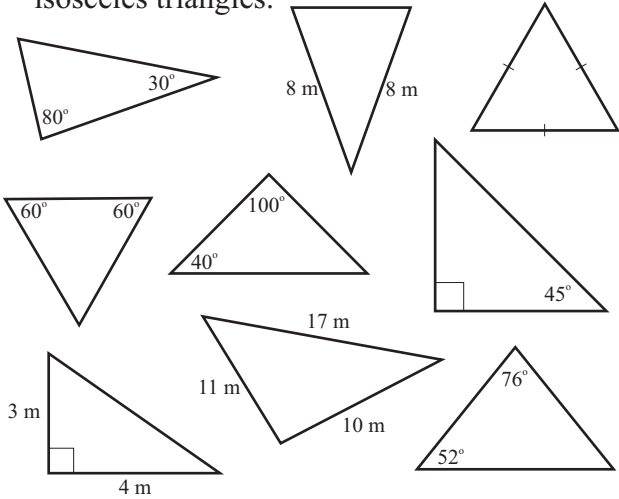
Master Maths 7 Worksheet 70

Triangles and Quadrilaterals

70

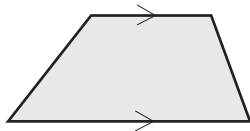
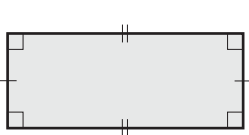
Name: _____

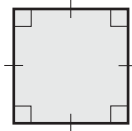
1. Study the triangles below and colour in red the scalene triangles and colour in blue the isosceles triangles.

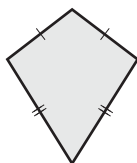
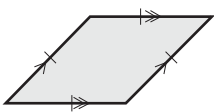


2. What is the name given to the triangles not coloured in from question 1?

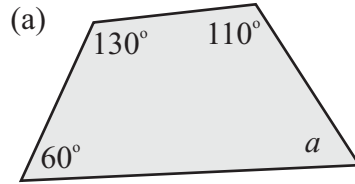
3. Write the name of each of the following quadrilaterals.



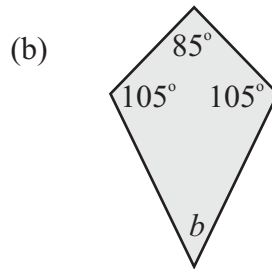




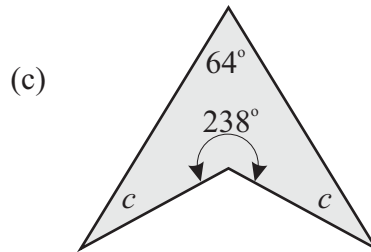
4. Find the unknown angles in the following quadrilaterals.



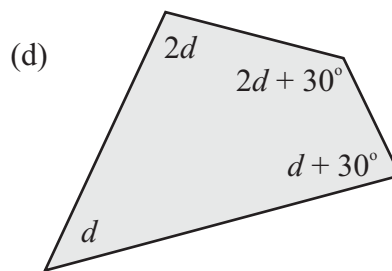
$a =$



$b =$



$c =$



$d =$

5. How many rectangles are in the drawing below? (The answer is not 6!)

