

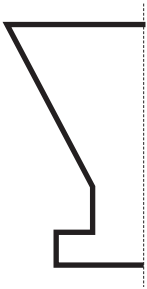
SHAPES 3

MARK


15

1. Complete the symmetrical shapes below by drawing the other half of each shape.
The lines of symmetry are shown.

(a)



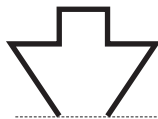
(b)



(c)



(d)



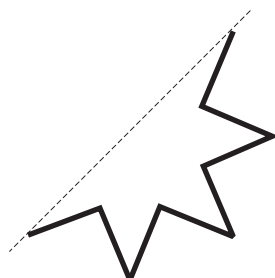
(e)



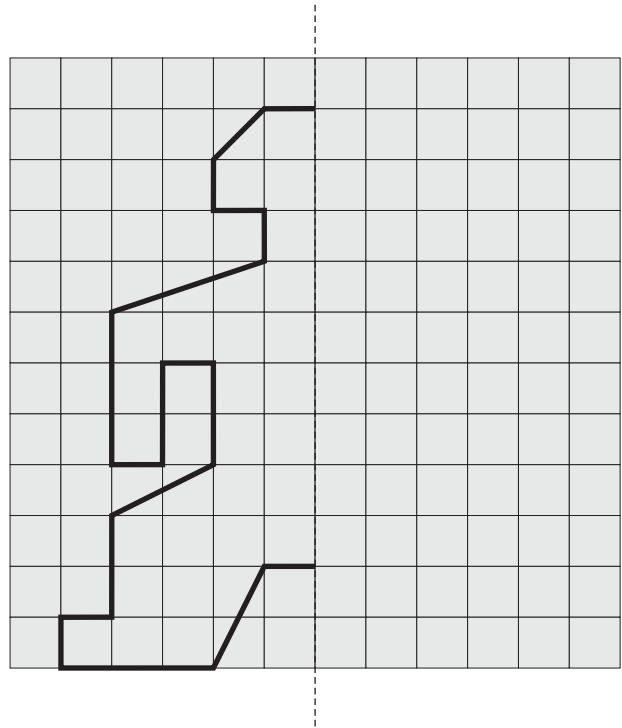
(f)



(g)




2. Complete the symmetrical shape below by drawing the other half.
Colour in the shape.




3. Matilda could see the reflection of a clock in a mirror as shown below.


What time is it?



4. A clock is shown below.



Adelaide tried to draw an upside-down reflection of this clock but made five mistakes. Her drawing is below. Circle the five mistakes she made.



5. Bobbie, Codie and Xeh noticed that their names were the same when reflected.

BOBBIE CODIE XEH
BOBBIE CODIE XEH

Can you think of two other words that look the same when reflected.

6. Draw an enlarged version of this creature on the grid below.

