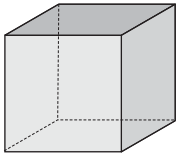
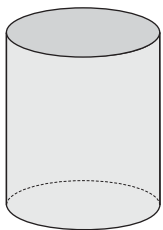
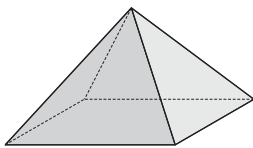


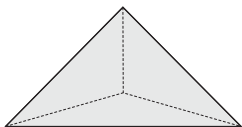
Name: _____

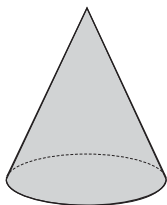
1. Next to each object below sketch it and write its name.

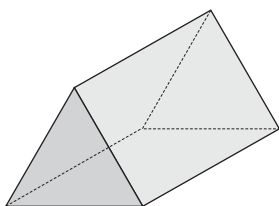




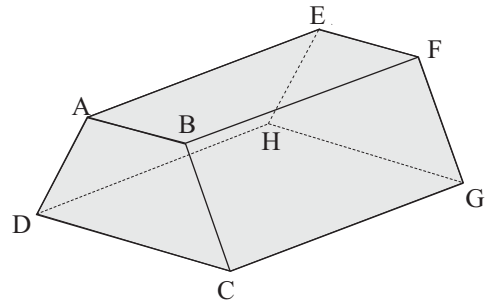








2. This object is called a trapezoidal prism.



(a) List the **edges** that are parallel to edge AB.

(b) List the **face** that is parallel to face ABFE.

(c) Which **line** is parallel to line EH?

(d) Find **one** line that is perpendicular to line CD.

3. Complete the following table where:

V is the number of vertices

F is the number of faces

E is the number of edges

	V	F	E	V+F-E
	8	6	12	2